

Q1. $87 \div 3 =$

1 mark

Q2. $8628 \div 4 =$

1 mark

Q3. Megan and Chen are washing cars.

Megan gets £39 and Chen gets £55.

They share what they get **equally** between them.

How much does each of them get?




Show your working

£

2 marks

Q4. A box holds 6 eggs.



How many boxes are needed to hold 52 eggs?

1 mark

Q5. A shop sells postcards in **packs of 6** and **packs of 8**.



Alan bought **4 packs of 8 cards**.

How many cards did he get?

جواب

1 mark

Shereen bought some **packs of 6 cards**.

Altogether she has **30 cards**.

How many **packs of 6** did she buy?

جواب

1 mark

Q6. Calculate $942 \div 6$

جواب


1 mark

Q7. Calculate $847 \div 7$

Answer

1 mark

Q8. A shop sells postcards in **packs of 6** and **packs of 8**.



Alan bought **4 packs of 8 cards**.

How many cards did he get?

Answer

1 mark

Shereen bought some **packs of 6 cards**.

Altogether she has **30 cards**.

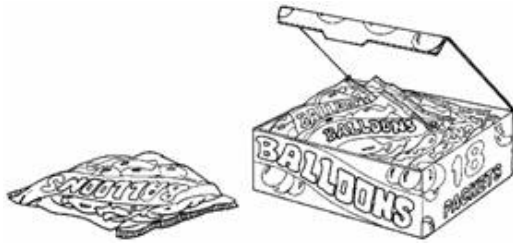
How many **packs of 6** did she buy?

Answer

1 mark

Q9. There are **5 balloons** in a **packet**.

There are **18 packets** in a **box**.



How many balloons are there altogether in a **box**?

Answer →

1 mark

There are **5 balloons** in a **packet**.



Kofi needs **65 balloons**.

How many **packets** does he need?

Answer →

1 mark

Q10.

Alfie buys **two** books, each at the same price.
He pays with a £10 note and gets £2.30 change.



What is the cost of **one** book?



Show your working

£

2 marks

Q11.

Circle the **two** divisions which have an answer of **5 remainder 2**



$$17 \div 5$$

$$17 \div 3$$


$$22 \div 4$$

$$22 \div 5$$

1 mark

Q12.

Calculate **56 ÷ 4**



1 mark

Q13. At a tournament there are 7 players in each team.

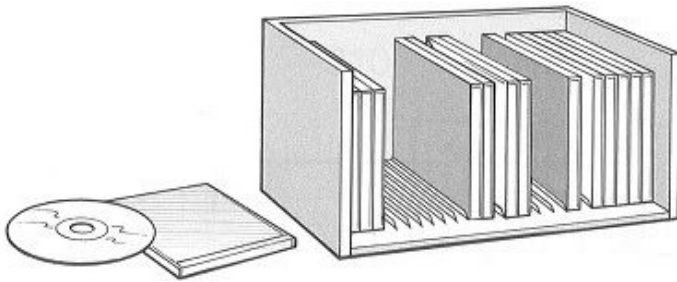
There are 112 players altogether.

How many teams is this?



1 mark

Q14. Here is a CD rack.



One rack holds **25** CDs.

David has **83** CDs.

How many racks does he need to hold **all** his CDs?



1 mark

Lin has **6** racks **full** of CDs.

How many CDs does Lin have altogether?



1 mark

Q15. A shop sells jars of honey and honey dippers.



By brockvicky [CC BY-SA 2.0], via Flickr

jar of honey



By Thien Gretchen [CC BY-SA 2.0], via Flickr

honey dipper

Chen bought **three** jars of honey and a dipper.

The total cost was £5.40

The dipper cost 75p.

How much did each jar of honey cost?



Show your method

2 marks

Q16. Calculate $144 \div 6$



1 mark

Q17. Calculate $48 \div 3$

Handwritten mark

1 mark

Q18. Plastic cups are sold in packs of 8

Amir needs 27 cups.



How many packs must he buy?

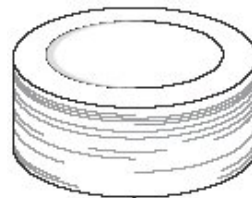
Handwritten mark packs

1 mark

There are 30 paper plates in a pack.

Amir buys 2 packs.

He uses 37 plates.



How many plates are left?

Handwritten mark plates

1 mark

