
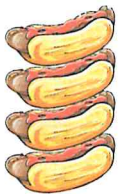


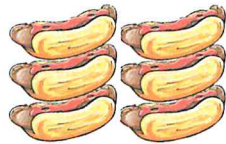
Betty's Cafe

The numbers 6, 7, 8 and 9

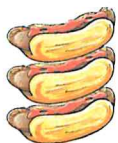

Add.




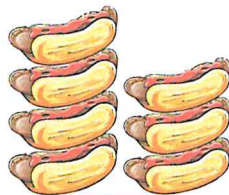
$$4 + \square = \square$$



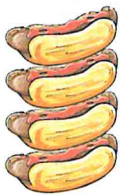

$$\square + \square = \square$$



$$\square + \square = \square$$



$$\square + \square = \square$$



$$\square + \square = \square$$



$$\square + \square = \square$$

Do the sums.

$$1 + 8 =$$

$$6 + 2 =$$

$$4 + 5 =$$

$$2 + 4 =$$

$$2 + 5 =$$

$$3 + 3 =$$